

# SANGHAMITRA SCHOOL

## Half Yearly Examination

### (RESULT ANALYSIS)



CLASS: VI

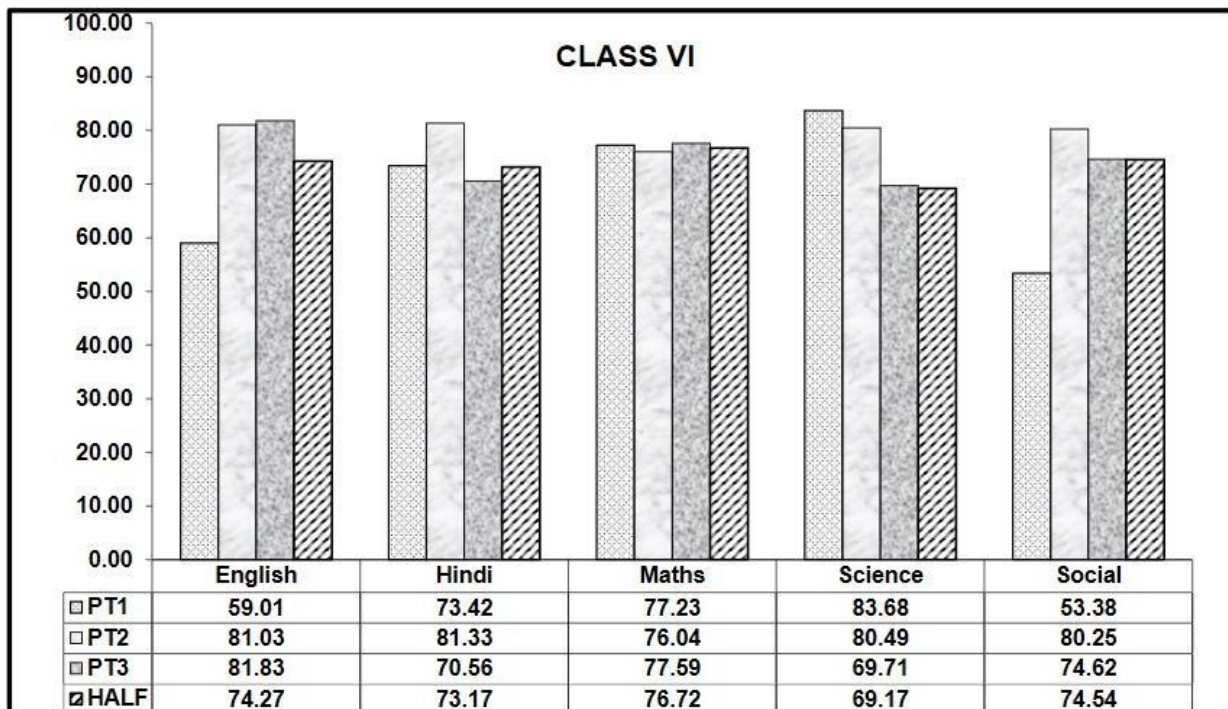
TOTAL STRENGTH:161

NO OF STUDENTS APPEARED FOR THE TEST:160

### Subject Averages

	ENGLISH	HINDI	MATH	SCIENCE	SOCIAL
A	75.50	73.19	79.19	71.09	76.69
B	74.84	73.5	75.53	69.94	75.13
C	76.39	73.5	76.32	69.03	74.59
D	70.16	69.71	74.60	65.32	71.77
E	74.48	76.03	77.97	70.48	74.52
<b>OVERALL</b>	<b>74.27</b>	<b>73.17</b>	<b>76.72</b>	<b>69.17</b>	<b>74.54</b>

### Graphical Representation



## Critical Questions

### English:

I  
Q.5 The word in the passage meaning the same as soft is (Understanding)

a) chronic b) smooth c) delicate d) cosmetic

Q.6 Choose the jumbled word which has the correct spelling.

a) iamlnest b) iamlenets c) amilinste d) milanetsei

II.

Q.5 Pick the opposite of the following word-bold(Analyzing)

a) Loud b) Slow c) Shy d) Angry

Q.6 Write the synonym of \_\_\_\_\_agreeable(Analyzing)

a) Sweet b) Pleasant c) Uniform d) Loud

III.

2. Where trees once stood'. This sentence means that\_\_\_\_\_Evaluating

a) There are many trees now

b) There are a few trees now

c) There are a lot of trees then

d. There weren't any trees now

V. I

Q.3 Identify the adjective in the sentence.

I wanted her to give me that pencil quickly

a) wanted b) that c) pencil d) quickly.

Q.5 Identify the adjective in the row that does not describe the noun.

1. Boat:- a. leaking b. wooden c. sore d.cargo

V.II

Q.3 There are five \_\_\_\_\_in my yard.

a) deers b) dears c) deer d) dear

Q.4 I saw a flock of white \_\_\_\_\_at the lake yesterday.

a) geoses b) geese c) goose d) geeses.

### Hindi:

खण्ड अ - प्र 1

ख) किसने सुख के साथ जीवन गुजारा-

(i) जिसने दुनिया में खूब धन कमाया

(ii) जिसने मीठी वाणी बोली

(iii) जिसने समय की कद्र की

(iv) जिसने समय को बर्बाद किया

प्र 2 3) दिए गए प्रश्नों के उत्तर सही विकल्प चुनकर लिखिए। (4अंक) (विश्लेषणात्मक)

क) उपर्युक्त गद्यांश का शीर्षक है -

(i) हमारे पर्व

(ii) हमारा देश

(iii) हमारा धर्म

(iv) हमारा परिवार

ख) शिक्षा और लेख किस शब्द के अनेकार्थी शब्द हैं।

- (i) काम (ii) पर (iii) पाठ (iv) ऊपर

ग) एक ही शब्द के अनेक अर्थ बताने वाले शब्द कहलाते हैं-

- (i) समानार्थी शब्द (ii) अनेकार्थी शब्द (iii) पर्यायवाची शब्द (iv) विलोम शब्द

## खण्ड ब

12) निम्नलिखित विषय पर पत्र लिखिए। (8अंक) (मूल्यांकन)

आपके विद्यालय में हो रहे पानी की समस्या की जानकारी देते हुए प्रधानाचार्य को पत्र लिखिए।

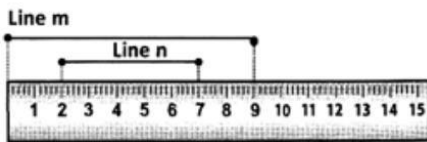
13) निम्नलिखित विषय पर विज्ञापन लिखिए। (9 अंक) (सृजनात्मक)

बाजार में एक नया टूथपेस्ट आया है, जिसमें नमक है, मिन्ट की खुशबू है, आयुर्वेद के गुण हैं, इस पेस्ट पर आकर्षक विज्ञापन तैयार कीजिए।

## Math:

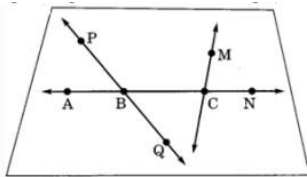
### Section I

9. Analyze the information carefully and find by what measure is line m longer than line n.



### SECTION III

25. Interpret the given figure, name the following: Evaluating



- Line containing point M
- Line passing through four points
- Line passing through three points
- Two pairs of interesting lines.

#### Section IV

29. Draw a number line and represent (i)  $5 \times 2$  (ii)  $7 + 5$ .  
(Remembering)

#### Science:

##### Section A

2. Name the device used to separate immiscible solutions.  
(Remembering)

13. Identify the spice shown in the figure and mention which part of the plant yields it.  
(Remembering).



##### Section B

22. How will you recognize the food from plant sources and food from animal sources in packaged food items? Give an example of your choice. (Hint: The label on the packing).  
(Understanding).

##### Section C

27. Lemonade is prepared by, mixing sugar and lemon juice in water. You wish to add ice to cool it. Should you add ice to lemonade before or after dissolving sugar in water? In which case it would be possible to dissolve more sugar? Why? (Applying)



#### Social:

##### Section A

Assertion (A): Earth receives light and heat from the Sun. Reasoning (R): Only the part of Earth facing the sun receives light. (Analysis)

- a) Both A and R are true and R is correct explanation of A
- b) A is true but R is false
- c) R is true but A is false



d) Both A and R are true but R is not correct explanation of A. 10. Bangladesh, India and Pakistan are neighbouring countries. Determine the country ahead in time. (Evaluation)

- a) India b) Pakistan c) Bangladesh d) All countries have same time.

##### Section B:

18." Dr.BR Ambedkar, a social reformer dedicated his life to eradicate social





inequality.” Justify the statement with three achievements of Ambedkar. (Evaluating)

**Section C:**

23. ii). “Parallels of latitudes decrease in size as they move towards the poles”. Which of the following is accurate? a) As they run from East to West b) Due to shape of Earth c)As it determines the climate d) Equator is in centre

24. iii) Interpret the accurate reason for unequal length of days and nights. a) Rotation b) Shape of earth c) Tilt of earth’s axis and revolution d) Revolution

**PTM QUALITY QUADRANT**

<b>Kudos</b> 	<b>Concerns</b> 
1. Thank you teachers, for the continuous support.	
<b>Questions</b> 	 <b>Suggestions</b>
1) When will the school begin working as usual.	1) Increase student engagement in online class. 2) Please provide more assignments. 3) Help my child to speak in the class. 4) Teach slow as it is online class. Repeat important topics.

**PTM TURNOUT**

Class VI A Section: 31/33 - 93.93 %
Class VI B Section : 32 /33 – 96.96 %
Class VI C Section: 32 / 32 – 100 %
Class VI D Section: 28 / 32 – 87.5 %
Class VI E Section: 29 / 31 - 93.54 %

**OVERALL PTM ATTENDANCE: 94.38%**

