

SANGHAMITRA SCHOOL
Half Yearly Examination
(RESULT ANALYSIS-2020-2021)



CLASS: IV

TOTAL STRENGTH: 1 6 1

NO OF STUDENTS APPEARED FOR THE TEST: 161

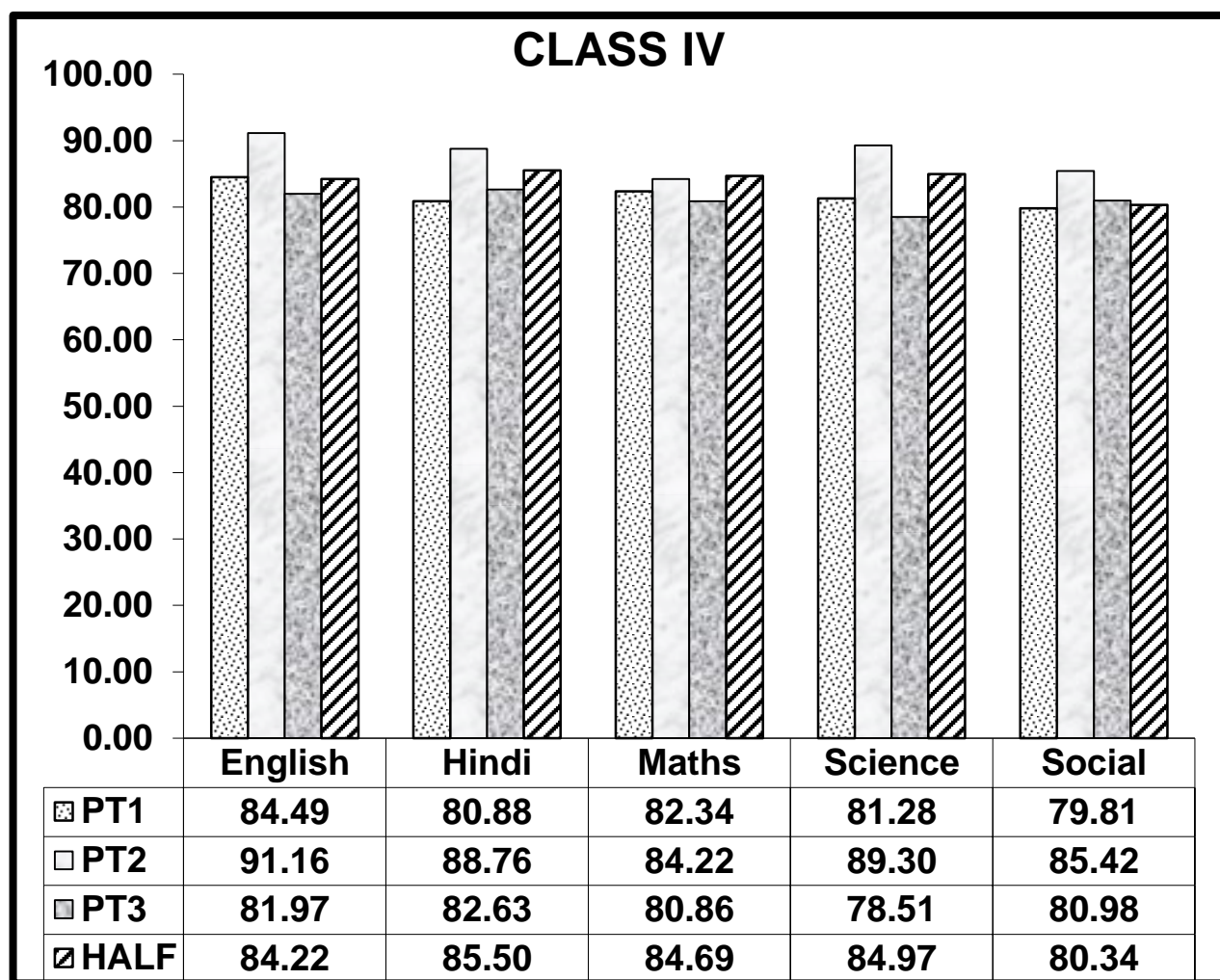
Subject Averages

Class 4	English	Hindi	Maths	Science	Social
A	82.91	83.78	83.63	84.22	79.75
B	83.67	84.93	84.93	83.77	79.4
C	87.88	88.5	89.22	87.09	85.03
D	83.59	85.03	84.25	84.34	79.78
E	83.03	85.28	81.41	85.44	77.75
Overall	84.22	85.5	84.69	84.97	80.34


Subject wise Grade Count




	English	Hindi	Math	Science	Social
A1	58	83	64	65	39
A2	53	33	39	48	56
B1	28	17	39	24	32
B2	10	11	9	16	15
C1	7	9	6	3	11
C2	3	5	0	2	6
D	0	0	2	0	0
E1	0	1	0	1	0

Graphical Representation






Class – IV Critical Questions

English	<p>1. Which pair of words from the passage mean exactly the same? (Analysing)</p> <p>A) ' puts' and 'makes' B) 'comes' and 'arrives' C) 'walks' and 'jumps'</p> <p>2. Who is the story teller in the book? (Understanding)</p> <p>A) The tiger B) Narayan himself C) The Guru</p> <p>3. What is another word for 'allows' as used on the cover page? (Remembering)</p> <p>A) gives B) lets C) asks</p> <p>4. Which of these words is the subject of the given sentence? (Analysing)</p> <p>a) The woman with the red hat danced gracefully.</p> <p>A) The woman with the red hat B) Danced gracefully C) The woman</p>
Hindi	<p>1Q) “ कौआ उसे लेकर तालाब के किनारे गया ” रेखांकित शब्द किसके लिए प्रयोग किया गया है ? (Remembering)</p> <p>(क) कौआ (ख) कबूतर (ग) मेंढक (घ) मछली</p> <p>2Q) सूर्यास्त (sunset) किस दिशा में होता है ? (Analyzing)</p> <p>(क) उत्तर (ख) पश्चिम (ग) पूरब (घ) दक्षिण</p> 
Math	<p>1) In 76,54,603 the Place Value of 4 is _____ and 3 is _____. (Remembering)</p> <p>2) Write the smallest number and the largest number from the given set of numbers. (Understanding)</p> <p style="text-align: center;">63,842; 9,45,250; 24,12,133; 9,72,360</p> <p>3) Divide 682 by 5 and check using Division Algorithm. (Understanding)</p>

<p>Science</p>	<p>1Q. ASSERTION: (Evaluating) A- The Camel lives in the desert is able to stay without water for long period of time. REASON: R- It stores large quantity of water in its hump. A) A is true, R is false.  B) Both A and R are true C) A is false, R is true. D)Both A and R are false</p> <p>2Q. Identify the given picture and write its habitat and one adaptation. (Remembering)  A) Name:--- . Habitat: ----Adaptation: ---  B) Name: ---. Habitat: ----Adaptation: ---</p>
<p>Social</p>	<p>1Q. Assertion and Reasoning (Analyzing) Assertion-In evergreen forest, trees remain green throughout the year which never shed their leaves. Reason- These forests grow in areas that experience moderate rainfall. a. Both A and R are false b. <u>A is true but R is false</u> c. Both A and R are true d. A is false but R is true</p> <p>2Q. Chipko movement is associated with the prevention of _____ (Understanding) a. River pollution b. <u>Deforestation</u> c. Construction of dams d. Air pollution</p> <p>3Q. Unscramble the letters with the help of clues (Creating) group of islands is- PGORCAIEALH (ARCHIPELAGO)</p>

CLASS – IV QUALITY QUADRANT

 <h2>KUDOS</h2> <ul style="list-style-type: none">➤ Thank you so much for teachers<ul style="list-style-type: none">• support.• Excellent teaching.• care.➤ Appreciate teachers for their patience in conducting online classes.➤ Good co-ordination between teachers and students.	<h2>SUGGESTIONS</h2>  <p>-----</p>
<h2>CONCERNS</h2> <ul style="list-style-type: none">• Needs more worksheets in grammar. 	<h2>QUESTIONS</h2> <p>-----</p>

CLASS – IV PTM TURNOUT		
IV A	96.87%	Overall - 91.92 %
IV B	90.9%	
IV C	96.87%	
IV D	90.62%	
IV E	84.37%	

