

Sanghamitra School

Class: IV

Annual Revision worksheet-3

Sub: English

Objective: To revise grammar concepts for annual exam.

I. Choose the correct adverb of manner to complete the sentences:

1. The old man walks \_\_\_\_\_ ( always, everywhere, slowly)
2. The child slept \_\_\_\_\_ (daily, often, soundly)
3. We were received \_\_\_\_\_ (lately, kindly, frequently)
4. She sang \_\_\_\_\_ in the concert. (daily, well, everywhere)
5. It is raining \_\_\_\_\_. (daily, heavily, everywhere)

II. Choose the correct adverb of place to complete the sentences:

1. The little lamb followed Mary \_\_\_\_\_. (often, everywhere, slowly)
2. Hang the picture \_\_\_\_\_. (neatly, there, always)
3. It's very sunny but cold \_\_\_\_\_. ( frequently, outside, lately)
4. The girls are playing \_\_\_\_\_. (tomorrow, daily, upstairs)
5. Please come \_\_\_\_\_. ( safely, in, now)

III. Choose the correct adverbs of time to complete the sentences.

1. They are to be married \_\_\_\_\_ (next week/soundly)
2. I hurt my knee \_\_\_\_\_ (there/yesterday/early)
3. My brother arrived \_\_\_\_\_ (late/home/rapidly). He missed the bus.
4. I have heard this \_\_\_\_\_ (there/before/sometimes)

5. We go jogging \_\_\_\_\_ (in the morning/near here/quickly)

IV. Choose the correct adverb of frequency and complete the sentences:

1. Suraj practices the piano \_\_\_\_\_. (there, quickly, regularly)
2. The children \_\_\_\_\_ go to school on the bus. (rapidly, always, here)
3. He struck the ball \_\_\_\_\_ ( slowly, there, twice)
4. We walk home from class \_\_\_\_\_. (everyday, quickly, outside)
5. Amit \_\_\_\_\_ tell lies. (sweetly, never, tomorrow)

V. Underline the adverb in the sentence and state its kind.

1. The child sang sweetly. \_\_\_\_\_
2. Please come in. \_\_\_\_\_
3. Please put the bags down. \_\_\_\_\_
4. The kids are playing upstairs. \_\_\_\_\_
5. I exercise daily. \_\_\_\_\_
6. The breeze blew softly. \_\_\_\_\_
7. The old woman walked slowly. \_\_\_\_\_
8. Please drive more carefully. \_\_\_\_\_
9. He has travelled everywhere. \_\_\_\_\_
10. The children are playing there. \_\_\_\_\_
11. Please leave now. \_\_\_\_\_
12. I am meeting them tomorrow. \_\_\_\_\_

कक्षा - चौथी

संघमित्रा विद्यालय

विषय - हिन्दी

निज़ामपेट रोड़ कुकटपल्ली

दिनांक - 17- 04 -2021

Revision Practice sheet – 3

Dear children,

Kindly complete the given practice sheet as per schedule given below -

- Write in Hindi homework book neatly.
- Objective – To revise for Annual exam.

### पठित काव्यांश (seen poem)

(i) निम्नलिखित पठित काव्यांश (seen poem) ध्यान से पढ़कर प्रश्नों के उत्तर लिखिए।

खेलोगे तुम अगर फूल से,  
तो सुगंध फैलाओगे।  
खेलोगे तुम अगर शूल से,  
तो पीड़ा ही पाओगे।

कौए का यदि साथ करोगे,  
तो बोलोगे कड़वे बोल।

1Q) फूलों के साथ खेलने से हम क्या फैलाते हैं ?

- (क) खूबसूरती बढ़ाते हैं।      (ख) सुगंध फैलाते हैं।  
(ग) दुर्गंध फैलाते हैं।      (घ) पीड़ा बढ़ाते हैं।

2Q) खेलोगे तुम अगर ----- से,

तो पीड़ा ही पाओगे। सही शब्द से खाली स्थान भरिए।

- (क) फूल      (ख) कौए      (ग) पेड़      (घ) शूल

3Q) “ सुगंध ” शब्द का अंग्रेज़ी अर्थ पहचानों ?

- (क) fragrance      (ख) smell      (ग) foul      (घ) funky

4Q) सही उत्तर पर (हाँ) और (गलत) उत्तर पर नहीं लिखिए।

- 1) कौए के साथ से मीठे बोल बोलोगे। ( )
- 2) शूल के साथ खेलने से हमें पीड़ा होगी। ( )
- 3) फूल सुगंध फैलाते हैं। ( )
- 4) बड़ों के साथ रहने से बड़े बन सकते हैं। ( )

5Q) “ कड़वा - मीठा ” ये वाक्य व्याकरण की दृष्टि से क्या है ?

(क) विशेषण (Adjective)

(ख) लिंग (Gender)

(ग) सर्वनाम (Pronoun)

(घ) विलोम शब्द (opposite words)

(ii) नीचे दिए गए वाक्यों में से विशेषण शब्द छाँटकर लिखिए।

- 1) अनार का रंग लाल है। - \_\_\_\_\_
- 2) रमेश एक अच्छा बच्चा है। - \_\_\_\_\_
- 3) आम मीठा है। - \_\_\_\_\_
- 4) गेंद का आकार गोल है। - \_\_\_\_\_
- 5) माँ काली साड़ी नहीं पहनतीं। - \_\_\_\_\_
- 6) सूर्य पूर्व दिशा में उगता है। - \_\_\_\_\_
- 7) तुम्हारी गुड़िया बहुत सुंदर है। - \_\_\_\_\_
- 8) मुझे मीठे सेब पसंद है। - \_\_\_\_\_
- 9) नौकर दो सेब ले आया। - \_\_\_\_\_
- 10) दिशा एक सुंदर लड़की है। - \_\_\_\_\_

Sanghamitra School

Annual Examination

Class – IV

Practice sheet 3

Subject - Math

(Note:- Solve the following questions in the home work book neatly to revise for annual exams. Practice each day few questions and complete the practice sheet by 19/4/21)

1) Represent the given decimal numbers on the abacus.

- a) 543.28      b) 76.097      c) 0.675

2) Expand the following decimal numbers.

- a) 658.134      b) 0.502      c) 456.89

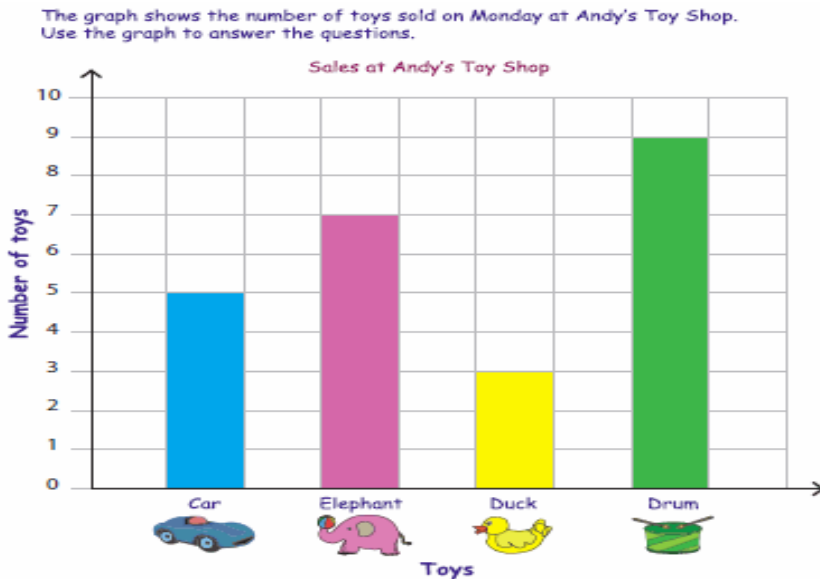
3) Convert the following fractions into decimal numbers.

- a)  $\frac{79}{10}$                       b)  $\frac{3}{25}$

4) Find the solution of the following.

- a)  $3467.98 + 657.023$                       b)  $768.347 - 567.006$

5) Read the following graph and answer the given questions.



- 1) How many cars were sold? \_\_\_\_\_
- 2) How many more elephants than ducks were sold? \_\_\_\_\_
- 3) Which toy sold the most? \_\_\_\_\_
- 4) How many elephants and drums were sold in all? \_\_\_\_\_
- 5) Which toy did the shop sell more, car or duck? \_\_\_\_\_

**SANGHAMITRA SCHOOL**

**CLASS-4, SUB-SCIENCE**

**Revision worksheet-4 for Annual Exams**

**ANSWER THE FOLLOWING IN ONE WORD.**

**1. Force which opposes motion of an object.**

**A. -----**

**2. The harmful substances that cause pollution are—**

**A.-----**

**3. Source of energy which does not get exhausted. -----**

**A.-----**

**4. Energy obtained from earth's surface –**

**A.-----**

**5. Any tool or equipment which helps us by making our work easy ---**

**A.-----**

**6. Force that always pulls an object to the earth's surface. —**

**A.-----**

**ANSWER THE FOLLOWING QUESTIONS**

**1Q. What will happen to a body in motion in the absence of friction?**

**2Q. What is matter? Give two examples.**

**3Q. There are many stars bigger than the sun but why do they appear smaller than the sun?**

**IDENTIFY THE PICTURE WHICH SHOWS THAT WORK IS DONE and give reasons.**

**A.**



**B.**



**FILL IN THE BLANKS:**

- 1. Leaves of the tree fall down due to \_\_\_\_\_ . (gravity/friction)**
- 2. \_\_\_\_\_ leads to soil erosion. (deforestation/afforestation)**
- 3. The pits on the surface of the moon are called \_\_\_\_\_. (Craters/valleys)**
- 4. Gases have neither a fixed \_\_\_\_\_ nor a fixed \_\_\_\_\_. (shape/volume/mass)**
- 5. \_\_\_\_\_ increases the movement of molecules inside the matter.( heating/cooling)**

**Sanghamitra School**

**Class: IV/Social          Annual Exam Revision worksheet-3          Le- Transport & Communication in India**

**Objective: To revise for Annual Exam**

**I. State whether the following statements are True/ False**

1. India does not have a well developed network of roadways, railways, airways and waterways. ( )
2. All the villages in India have metalled roads. (    )
3. Air transport is suitable for transporting perishable goods (    ).
4. People who cannot read can listen to the radio. (    )
5. Today we can talk to people in any part of the world over the telephone. (    )

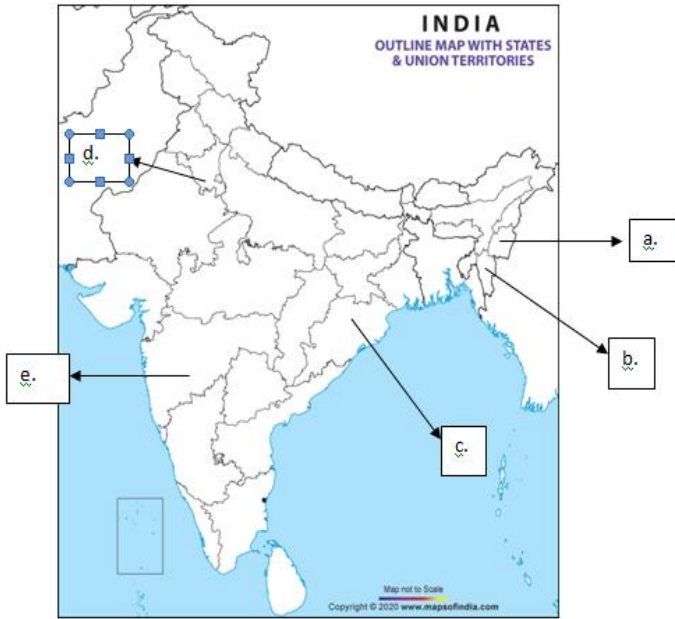
**II. Fill in the blanks**

1. \_\_\_\_\_ and \_\_\_\_\_ are the examples of luxury trains.
2. The first train ran in the state of Maharashtra, connecting between \_\_\_\_\_ and \_\_\_\_\_ in the year \_\_\_\_\_.
3. Full form of UNESCO \_\_\_\_\_.
4. Oil and petroleum products are carried by \_\_\_\_\_ ships.

**III. Match the following**


1. The most common and cheapest means of communication (    )      a. an essential part of our lives.
2. If the message is very urgent (    )      b. we can send through a speed post
3. Mobile phones have become (    )      c. is the postal service
4. A message sent through a fax machine (    )      d. as they both educate and entertain
5. People find films interesting (    )      f. reaches instantly.

IV. Identify the states marked on the given political map of India and write neatly in rough book.



V. Mention any 2 uses of each of the following

a.



b.

