

**SANGHAMITRA SCHOOL**  
**PT-5 (2020-21) Result analysis**



**Class : VIII**

**Total strength:160,**

**NO OF STUDENTS APPEARED FOR THE TEST: 159**

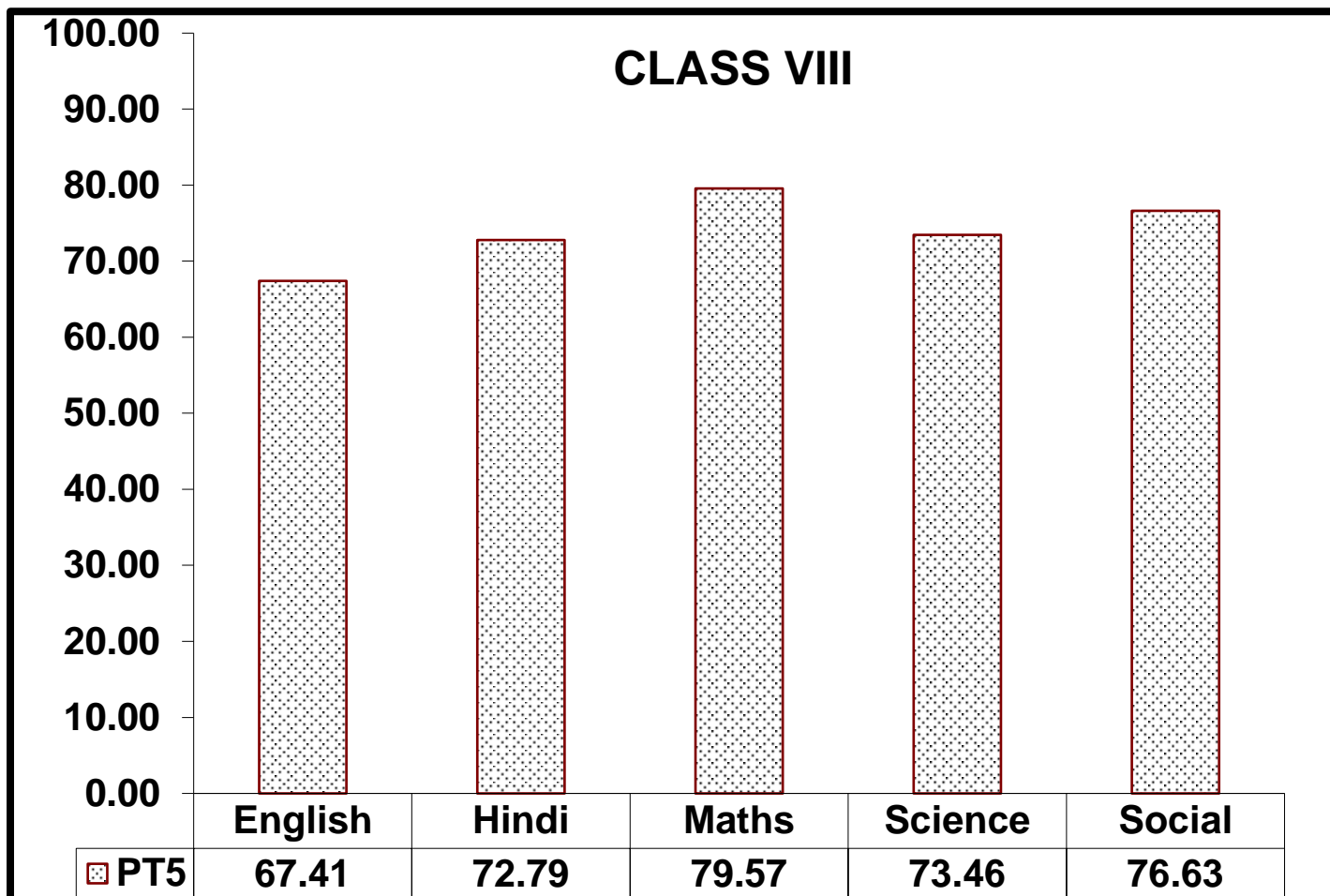
**(Absent: Gyana Dattu)**

<b>Subject</b>	<b>A</b>	<b>B</b>	<b>C</b>	<b>D</b>	<b>E</b>	<b>Overall</b>
<b>English</b>	69.02	59.64	70.52	69.18	68.67	<b>67.41</b>
<b>Hindi</b>	74.92	65.09	71.35	77.21	75.36	<b>72.79</b>
<b>Math</b>	80.65	68.10	83.55	82.38	83.15	<b>79.57</b>
<b>Science</b>	73.32	64.35	78.61	74.08	76.94	<b>73.46</b>
<b>Social</b>	75.85	68.58	81.17	82.46	75.08	<b>76.63</b>

**MARKS RANGE**

<b>Subject</b>	<b>0 - 10 (Less than 25%)</b>	<b>10 - 20 (25%-50%)</b>	<b>20 - 30 (50-75%)</b>	<b>30 - 40 (75 - 100%)</b>
<b>English</b>	-	21	76	61
<b>Hindi</b>	2	17	42	97
<b>Math</b>	-	14	37	38
<b>Science</b>	2	16	57	83
<b>Social</b>	2	15	32	109

## Graphical Representation



### CRITICAL QUESTIONS

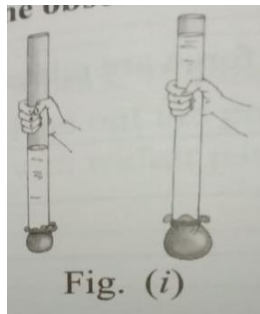
#### ENGLISH:

6. The passage suggests which of the following about the ivory ban? (understanding)
- (a) It will be successful now that the DNA-based map has been developed.
  - (b) It has been mostly unsuccessful in reducing the trade of illegal ivory.
  - (c) It will continue to be ineffective unless the problems of political corruption are solved.
  - (d) Western monetary support was a major factor in its success.
7. The response of the countries with the worst poaching problems to the situation was most analogous to: (applying)
- (a) a tax evader who uses deceptive accounting practices to hide her income from auditors.
  - (b) an embezzler who steals from her company by pilfering small amounts of money over a long period of time.
  - (c) a criminal who argues that it is not he but one of his accomplices who is guilty of a crime.

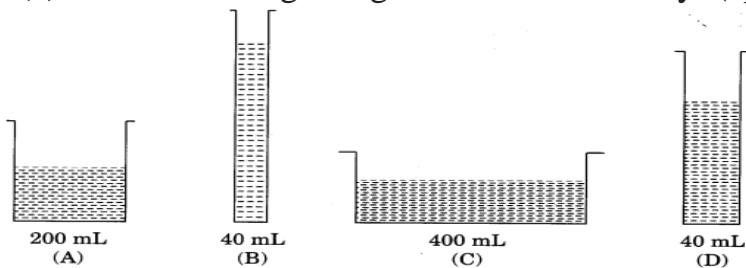
- (d) a con artist who convinces his victim that it is in the victim's best interest to help him.
8. The passage suggests which of the following about the DNA-based map created by Zoologists? ( understanding)
- Its assemblage involved a great deal of work on the part of the researchers.
  - Its creation will force countries to accept responsibility for the ivory poached from within their borders.
  - The map is able to pinpoint the exact elephant from which poached ivory was obtained.
  - It must be updated constantly to account for changes in elephant populations.
9. The passage is chiefly concerned with: (applying)
- advocating a course of action for countries with poaching problems.
  - exposing the weaknesses of the ivory ban.
  - pleading with Western countries to re-institute financing for the ivory ban.
  - detailing a way to overcome a problem that has lessened the effectiveness of the ivory ban.
10. A word from the passage which means the same as a thing that provides obstruction to do something or someone is: (remembering)
- a. arduous      b. hindrance      c. enforces      d. pinpoint

## SCIENCE:

5. Write observation and conclusion of each of the following activities. (analysing)  
(1x2 = 2m)



17. (c) Observe the figures given below carefully. (applying) (2m)



Volume of water in each vessel is shown above. Arrange them in order of decreasing pressure

## HINDI:

पाठ-7 – मेरा दम घुटता है -से ,नुक्ता युक्त 4 शब्द लिखिए। (1M) (REMEMBERING)

## SOCIAL:

14.2 Relate to the type of farming practiced by the farmer ( Analysing )

A] subsistence B] shifting C] intensive D] extensive

9. Millions of jobs worldwide are created till day by \_\_\_\_\_ ( Analysing )

## MATH:

1. Identify the perfect cube from the following (Remembering)




(A)  $4^9 \times 7^6$  (B)  $2^2 \times 5^3 \times 6^4$

(C)  $3^3 \times 8^6 \times 13^2$  (D)  $4^2 \times 9^2 \times 14^2$

4. Which of the following is both a perfect cube and perfect square?

(A)  $6^3 \times 12^3$  (B)  $12^2 \times 18^2$  (C)  $5^2 \times 2^3 \times 10$  (Applying)

## QUALITY QUADRANT

<p><b>KUDOS:</b></p>  <ul style="list-style-type: none"><li>• Happy and satisfied with the online classes</li><li>• Fine teaching support</li></ul>	<p><b>QUESTIONS:</b></p>  <ul style="list-style-type: none"><li>• Will the final exams be offline.</li><li>• Will the school reopen for this academic year?</li></ul>
<p><b>CONCERNS:</b></p> <ul style="list-style-type: none"><li>• Kindly allow students to get their doubts clarified in offline.</li><li>• Not updating the works in time.</li><li>• Unable to do English comprehension</li><li>• Not practising math regularly</li></ul> 	<p><b>SUGGESTIONS:</b></p> <ul style="list-style-type: none"><li>• Practice worksheets in math.</li></ul> 