



SANGHAMITRA SCHOOL

Half Yearly Examination

RESULT ANALYSIS

CLASS: V

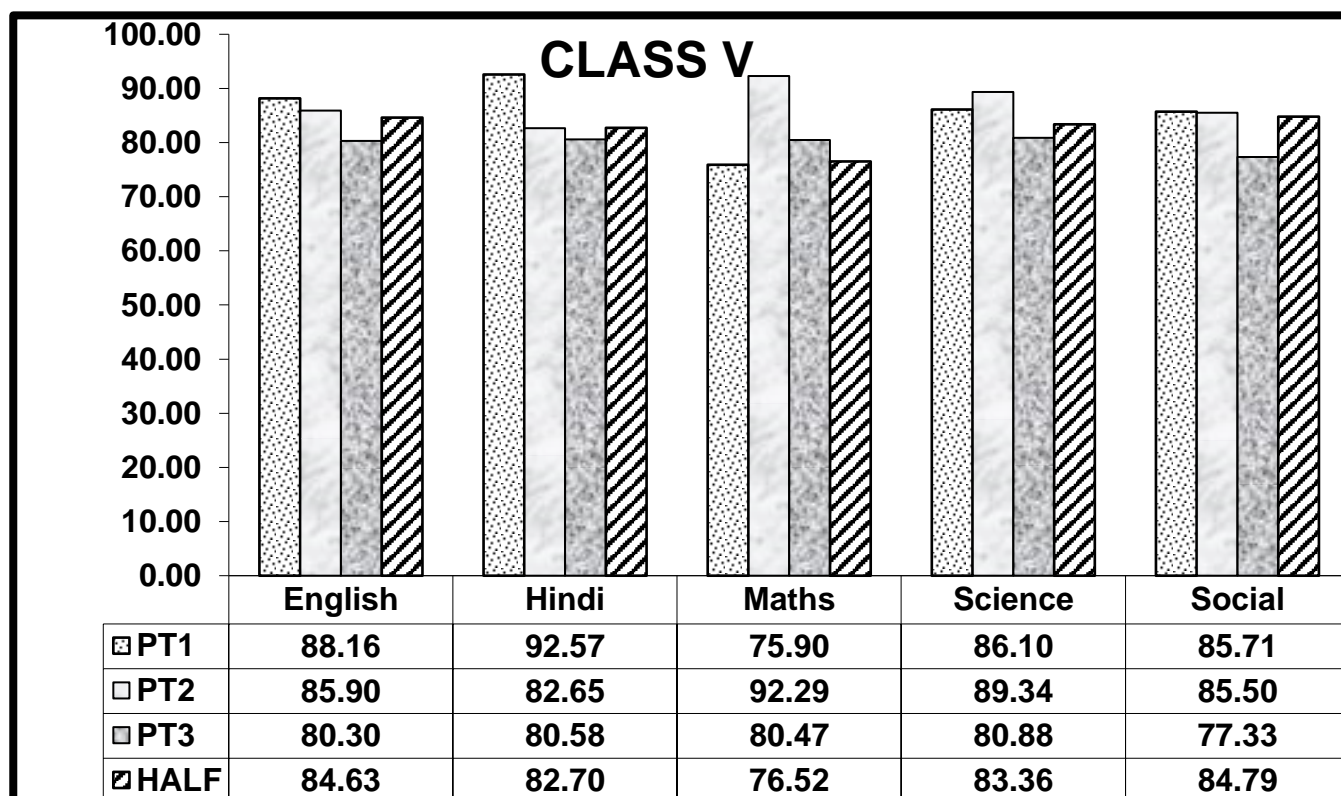
TOTAL STRENGTH: 161

NO OF STUDENTS APPEARED FOR THE TEST: 161

Subject Averages

	ENGLISH	HINDI	MATHEMATICS	SCIENCE	SOCIAL SCIENCE
A	82.47	81.32	75.25	82.81	85.5
B	86.41	84.13	77.25	84.25	84.69
C	85.97	80.90	77.31	85.47	84.5
D	86.69	85.48	81.25	84.44	87.63
E	81.59	81.68	71.56	80	81.59
OVERALL	84.6	82.7	76.5	83.3	84.7

Graphical Representation



GRADE COUNT SUBJECT WISE

Class V	English	Hindi	Mathematics	Science	Social Science
A1	65	63	40	58	69
A2	48	42	45	54	47
B1	22	25	25	29	22
B2	17	11	17	5	10
C1	7	10	15	10	10
C2	1	6	13	5	0
D	1	4	4	0	1
E1	0	0	2	0	1
E2	0	0	0	0	1

Critical Questions



English

Bit I Q1

Read the above passage carefully and answer the questions.

1. The author wrote the passage on chewing gum to _____ [Analysing]
 - a. Inform us about its good qualities
 - b. Tell us how it came into use and became popular
 - c. Educate us about many people.
2. Which of these events took place first in the passage? [Understanding]
 - a. These two men began to produce and sell chewing gum in the 1870's.
 - b. They made cuts in the bark of the tree.

c. The Mayas called it Chicle.

3. Identify the correct spelling. [Analysing]

a. William Wrigle

b. William Wrigley c

. William Wrigly

4. Read the below sentences carefully and identify the false statement. [Analysing]

a. Sapodilla is also known as chikoo and sapota in India.

b. When the liquid hardened, it was tasty and enjoyable to chew.

c. Only Thomas Adams junior began to produce and sell chewing gum

Bit 2 Q 2 , Q 8

2. Read para 2 carefully identify the number of E letter words. [Analysing]

a. 4

b 2

c 3

8. Their skin is thick and rough. Select the antonyms for the words in bold.

[Remembering]

a. thin and smooth

b. light and smooth

c. thin and shiny

Bit III Q 3

Q3. 'Of course!' replied Chuskit. [Remembering]

The word Chuskit is a _____

a. proper noun

b. common noun

c. abstract noun

Bit IV Q 5

Q5. The word think is in _____ tense. [Understanding]

a. Present tense

b. past tense

c. future tense.

Bit VI IQ 4

4. _____ are words that sound the same but have different meanings and different spellings. [Remembering]

a. Homophones

b. Homonyms

c. Homographs

Bit X Non Detail

Answer the following questions in 15 to 20 words.

Q1 Name the village where the supermen lived? What would they like to do all the time? [Understanding]

Q2 Who were the responsible people in the village? How did they teach a lesson to the men? [Understanding]

Q3 How did the third man boast about himself in front of the strange man? [Understanding]

Q4 How did the four men request the stranger? [Understanding]

Bit XII Q 2

Q2 Read the below lines carefully and name the poem. Explain the given sentences in your own words. [Understanding] “That if we don’t heed the problem at hand It’s your life that’s at stake, the destruction of man”

HINDI:

2. चोट कविता से हमें क्या शिक्षा मिलती है? (Evaluation)

VIII. सिरदर्द के कारण दो दिन छुट्टी माँगते हुए अपने प्रधानाध्यापिकाजी को पत्र लिखिए।8M
(Understanding)

Math:

1. Find the product of 317×11 by quick method (Applying)

2. Round off the number 728422 to 10000 (Understanding)

3. Divide $256236 \div 12$ and check by division algorithm (Applying)

4. Write the face value and place value of the underlined digit and its number name of the numeral (Remembering)

i. 346,924,625

ii. 15,61,300

SCIENCE:

I.C. Fill in the blanks: (Remembering)

9. A seed with two seed leaves is called a _____.

11. Eating too much of fat rich foods may lead to a condition called _____.

D. 12. Unscramble the following letters related to **components of food** to make meaningful words: **(Applying)**

a. REINPOTS -

e. BOCATRADHYERS-

II. (Evaluating)

14. Assertion (A): Obesity is not a problem for sportsman even though his diet contains more carbohydrates and fats than a normal man. ()

Reason(R): A sportsman is able to spend more calories through strenuous exercise.

(a)Both A and R are true and R is the correct explanation of A

(b)Both A and R are false but R is not the correct explanation of A

(c)A is true but R is false

(d)A is false but R is true

SOCIAL:

12. Replace the **underlined words** to make a appropriate statement. [Creative]

[1m x 1Q = 1m]

Each longitude is located at an interval of one degree. So, the time difference between two consecutive latitudes is fifteen minutes.

15. In the question given below, there are two statements marked as Assertion [A] and Reason [R]. Read the statements and choose the correct option. [Evaluating]

[1mx1Q =1m]

Assertion [A] The vertical and horizontal lines form a network on the globe. It is called a grid.

Reason [R] The location is marked as the point of intersection of the relevant horizontal and vertical lines.

- A. Both A and R are true.
- B. Both A and R are false.
- C. Only A is true.
- D. Only R is false.

16. In the question given below, there are two statements marked as Assertion [A] and Reason [R]. Read the statements and choose the correct option. [Evaluating]
1mx1Q=1m]




Assertion –[A]Latitude of a place and the tilt of the EARTH determines the amount of sunlight it receives.

Reason [R] The tilt of the Earth axis is important; in that it governs the warming of the sun energy. [Evaluating]

A] only A is true B] only R is true C] Both A and R are true D] Both A and R are false





31. Complete the table for each of the climatic zones of the world. [Understanding] 5m

Climatic Zones	Climate	Vegetation	Wildlife	Location
Torrid Zone				
Temperate Zone				
Frigid Zone				



PTM QUALITY QUADRANT



Kudos 	 Concerns
<p>1. Thank you all for the support, patience and guidance during this pandemic.</p>	<p>1. Please interact with the children during online class to make them more attentive.</p> <p>2. Kindly have a look into C.W/H.W. Not to load the kids.</p>
Questions 	 Suggestions
<p>When will all the offline classes start again?</p>	<p>1) Please extend Telugu period up to 40 mins or weekly 2 or 3 classes.</p> <p>2) Kindly increase the online class hours It would be great if classes can be taken from studio.</p>

PTM TURNOUT

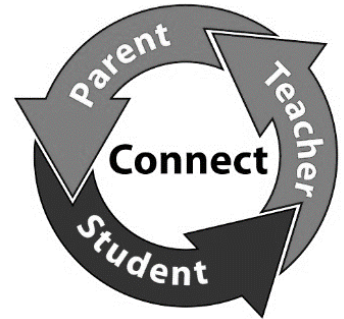
Class V A Section: 29/32 - 90.62 %

Class V B Section: 32 /32 – 100 %

Class V C Section: 31 / 32 – 96.87 %

Class V D Section: 33 / 33 – 100 %

Class V E Section: 29 / 32 - 90.63 %



OVERALL PTM ATTENDANCE:95.63%