

SANGHAMITRA SCHOOL

PT-5 Examination (RESULT ANALYSIS)



CLASS: VII

TOTAL STRENGTH: 160

NO OF STUDENTS APPEARED FOR THE TEST: 159

(Absentees – Lakshana (7B) Shourya Reddy (7D)

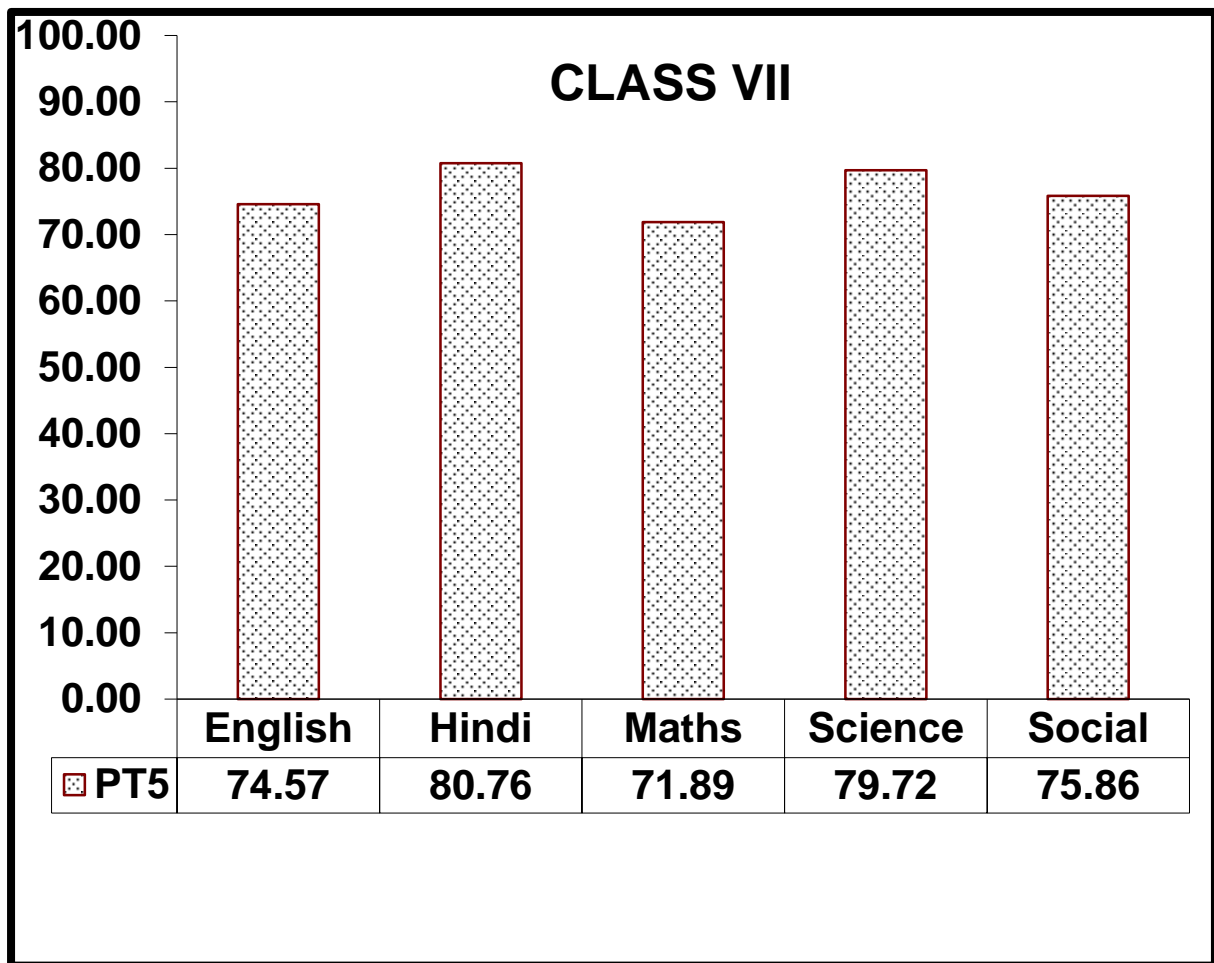
Subject Averages

	ENGLISH	HINDI	MATH	SCIENCE	SOCIAL
A	72.10	80.74	66.1	80	71.07
B	74.48	78.87	67.9	80.60	75.12
C	73.67	79.27	77.1	79.44	79.8
D	76.90	80.48	74.9	79.22	78.65
E	75.70	69.55	73.4	80.86	75.06
OVERALL	74.57	81.2	72	79.72	75.94

Subject wise Marks Range

SL.NO	CLASS	0-10 MARKS	10 -20 MARKS	20-30 MARKS	30 -40 MARKS
1.	English	2	11	52	93
2.	Hindi	-	8	34	116
3.	Math	4	19	46	89
4.	Science	-	11	36	117
5.	Social	3	10	44	101

Graphical Representation



Critical Questions

English

CRITICAL QUESTIONS :

1) Which of these questions about jigsaw puzzles can be answered by reading only the **second paragraph**? (evaluating)

- (a) How much did jigsaw puzzles cost?
- (b) When was the jigsaw invented?
- (c) Why were the jigsaw puzzles invented?
- (d) Who first introduced cardboard puzzles?

2) The word **retrospect** can be replaced by _____ (understanding)

- a) prospect
- b) prophesy
- c) neglect
- d) rethink

4) He has been charged ————— the murder of his landlady.(applying)

a) out b) with c) by d) from

5) Did Maryam face any discrimination during her education in Iran? Support your answer with gender related vocabulary.(analysing)

Hindi

CRITICAL QUESTIONS :

प्र8) विनय को बगीचे में घूमते हुए ----- सुनाई दी, उसने देखा कि साँप पत्तों में से निकल उसकी ओर आ रहा है। रिक्त स्थान की पूर्ति उचित शब्द से करें।(Applying)

क) घरघराहट ख) खरखराहट ग) सरसराहट घ) खटखटाहट

ख) प्र10) पड़ोस के कोई साहब बाल्टी भर दूध देने आए थे । रेखांकित कारक के भेद

पहचानिए। (Applying)

क) कर्ता ख) कर्म ग) संबंध घ) संप्रदान

RECOMMENDED QUESTION :

प्र1) सत्कार का सही वर्ण विच्छेद पहचानिए। (Understanding)

क) स्+अ +त् +अ +क् +आ+र्+अ

ख) स्+आ+त् +अ +क् +आ+र्+अ

ग) स्+अ +त् +आ +क् +आ+र्+अ

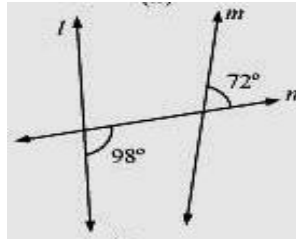
घ) स्+आ +त् +अ +क् +आ+र्+अ

Math

CRITICAL QUESTIONS :

1) Find the value of $-2\frac{2}{3} + 2\frac{1}{15} - 3\frac{2}{5}$ (Evaluating)

2) From the given figure state whether $p \parallel q$ or not. Give reason?
(Analysing)



3) The absolute value of $|-3/7 - 4/7| = \underline{\hspace{2cm}}$ (Applying)

Science

CRITICAL QUESTIONS :

12) Venu and Gaurav were taught about the magnetic effect of electric current in their school. In order to understand the phenomenon clearly, both of them decided to make electromagnets. Venu used 50 turns of wire over an iron screw while Gaurav used 100 turns

- i) Which electromagnet will attract more pins why?(Analyzing)
- ii) State the values shown by Venu and Gaurav

Social

Critical Questions-

Q.1. Arrange the landforms made by rivers in the correct sequence.
(Creating)

1. Waterfall 2. Source 3. Estuary 4. Flood Plain.
a. 2-1-3-4 b. 2-4-1-3 c. 3-2-4-1 d. 2-1-4-3

Q.2. Predict which one of the following should be done in case of an earthquake. (Applying)

- a. Move away to open places b. Remain in the affected area.
c. Look for shelter in high rise buildings. d. Take the staircase to run away.

Q.3 Predict which of these magnitudes of earthquake is destructive for life and property. (Applying)

- a. Above 2 b. Above 7 c. Above 4 d. Above 5

Q.4.Examine the options and choose the suitable one for the blank. (Applying)






_____ has made it easy for us to search for any information within no time.

- a. Internet b. Magazines c. Newspapers d. Mobile phones.

Q.5. Predict the kind of media which can be broadcast to a wider community and reach remote places. (Applying)

- a. Electronic media b. Print media c. Social Media. d. Journals

QUALITY QUADRANT

<div style="display: flex; align-items: center;"> <div style="margin-right: 20px;">KUDOS</div>  </div> <ul style="list-style-type: none"> Very much satisfied with online classes. Happy with the decision of teaching the whole syllabus and extending classes till May. 	<div style="text-align: center;">SUGGESTIONS</div>  <ul style="list-style-type: none"> More homework is required, especially in Math.
<div style="text-align: center;">   </div> <div style="margin-top: 10px;">CONCERNS</div> <ul style="list-style-type: none"> Not practising Math regularly. <p>Not completing class works on time.</p>	<div style="text-align: center;">QUESTIONS</div> <div style="text-align: center; margin: 10px 0;">  </div> <ul style="list-style-type: none"> How will the Annual Exams be conducted? When will the school re-open?