



SANGHAMITRA SCHOOL
PT – V RESULT ANALYSIS (2020-21)



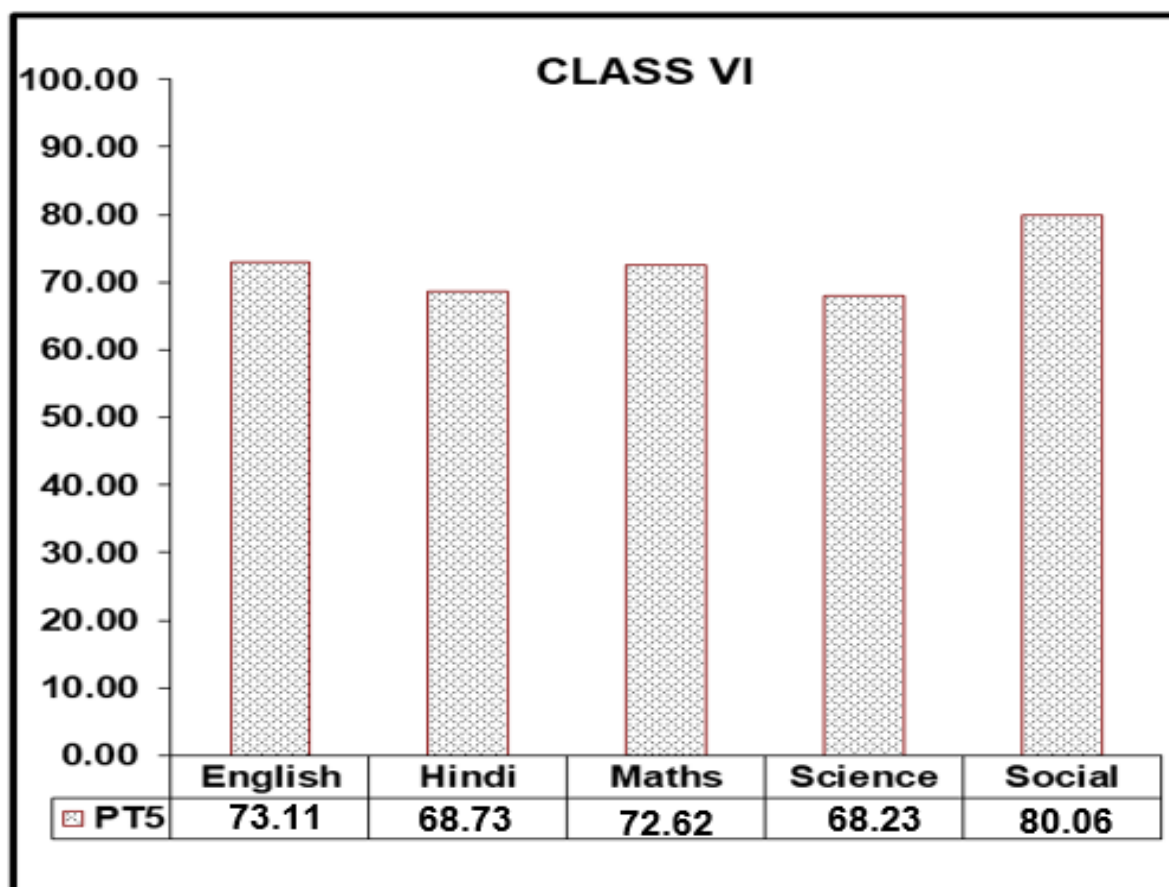
CLASS VI

TOTAL NO OF STUDENTS: 162

SUBJECT AVERAGES

Subject	Total no of Students	A Sec	B Sec	C Sec	D Sec	E Sec	Overall
English	162	78.11	72.11	73.61	67.64	74.14	73.11
Hindi	162	72.13	70.04	66.80	66.00	68.71	68.73
Math	162	79.10	74.67	74.30	63.87	71.17	72.62
Science	162	71.48	73.59	64.90	61.23	69.96	68.23
Social	162	82.75	83.55	76.56	74.51	82.93	80.06

Graphical Representation



Subject Wise Marks Range

CLAS VI	ENGLISH	HINDI	MATH	SCIENCE	SOCIAL
0-10	-	5	8	6	-
10-20	17	28	27	37	11
20-30	61	50	32	44	41
30-40	84	79	95	75	110



CRITICAL QUESTIONS

English



- I Q4. The word sliver is likely to mean _____ (Analyzing)
a shadow of a distant heavenly body
b. a thin piece cut off from a larger piece
c. a type of shiny, white precious metal
d. a shaky, slippery kind of movement

- II. Q1. To which city is the First flight headed after daybreak? (Understanding)
a. Sydney
b. Boston
c. New York
d. San Francisco

- Q5. Singapore is to the south- east of New Delhi. In which direction will SQ 408 fly out?
(Understanding)
a. south-west
b. North-west
c. North- East
d. South-East

- V. ii 3. A bouquet of flowers _____ required for the event
a. are
b. have
c. has
d. is

Hindi

प्र. 8 सहे वार पर वार 'वाक्यांश में वार कौन कर रहा है Analyzing) –

क)अंग्रेज ख)बुंदेल ग)मराठा घ)झाँसी के लोग

प्र. 10 उसके फूल यहीं संचित हैं'। रेखांकित शब्द के स्थान पर दूसरा शब्द बदलकर लिखिए ?

(creating))

क)एकत्र ख)राख ग)जलना घ)कर्म-भूमि

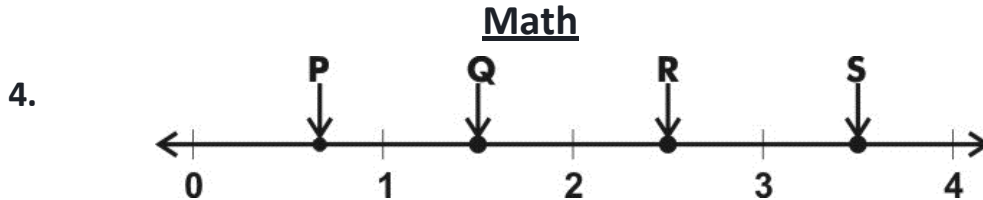
प्र. 20 सूर्य , नौका, कीड़ा किस शब्द के अनेकार्थी शब्द हैं ।) Analyzing)

क)पतंग ख)गुड़िया ग)खिलौना घ)रवि

22) निम्नलिखित प्रश्न का उत्तर लिखिए। (4 अंक))Evaluating)

24) निम्नलिखित विषय पर पत्र लिखिए। (6अंक) (मूल्यांकन)

वृक्षारोपण करने के लाभ पर चर्चा करते हुए अपने भाई को पत्र लिखिए ।



Identify which pointer shows the correct position of $\frac{3}{2}$ on the number line?

(Remembering)

(A) P

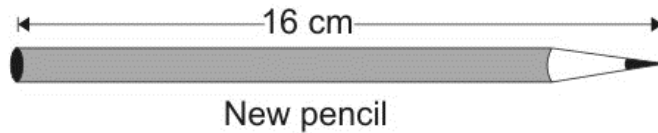
(B) Q

(C) R

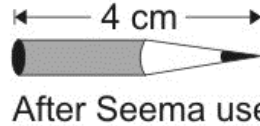
(D) S

5. Seema bought a new pencil.

(Applying)



After using it for a few days, it looked like this –



How much of the pencil has Seema used?

(A) $\frac{1}{4}$

(B) $\frac{1}{3}$

(C) 12

(D) 34

22. Rahul did $\frac{1}{3}$ of the work yesterday and $\frac{2}{3}$ of the work today. How much work he has to do tomorrow to complete his remaining work?

Science

1 Match the following: (2m) (Evaluation)

- i. Cutting of wood () a. A permanent change
- ii. Making of curry () b. A physical change
- iii. Burning of a candle () c. A physical irreversible change
- iv. Melting of ice to water () d. Both physical and chemical change

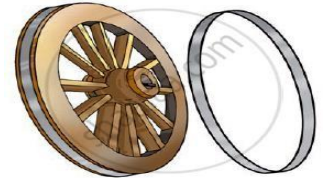
2. Assertion- A freely suspended magnet shows N-S direction.

Reasoning- Earth behaves like a magnet whose poles are opposite to geographical poles.

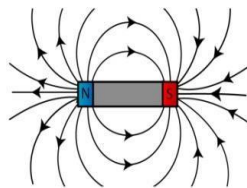
- a. Both assertion and reasoning are true.
- b. Both assertion and reasoning are false.
- c. Assertion is true but reasoning is false.
- d. Assertion is false but reasoning is true.

3. Which main property of metal is used in fixing an iron rim to a wooden wheel? (applying)

- a. Change in size
- b. Change in shape
- c. Change in its colour
- d. Change in its composition



4. What is shown in the adjacent figure? Define it and explain briefly. (3m) (understanding)



5. You are given a magnet whose North and South poles are not marked. Explain with a diagram how would you identify the poles? (2m) (Creating)

Social Section A

5. **Assertion (A):** The Indian ocean is strategically named after the country India

Reasoning (R): Indian ocean has islands in it. (Analysing)

- a) Both A and R are true and R is correct explanation of A
- b) A is true but R is false
- c) R is true but A is false
- d) Both A and R are true but R is not correct explanation of A.



9. Fill in the blank:

The _____ refers to the body that exercises ruling authority (Remembering)

Section B

13. Create a flow chart to represent the levels of government in India, name the elected representative of each level. (Creating)





Section C

15.4) The picture represents which form of government.

- a) Democracy
- b) Dictatorship
- c) Hereditary
- d) Monarchy



CLASS VI Overall Quality Quadrant (2020-21)

 <h3 style="margin: 0;">Kudos</h3>	 <h3 style="margin: 0;">Concerns</h3>
<p>1. All doubts are clarified in the class promptly.</p> <p>2. Thanks to Mam and teachers for excellent support.</p> <p>3. Happy with teacher's timely feedback.</p>	<p>1. More writing work is given.</p> <p>2. Need more practice worksheets in Math and Hindi.</p> <p>3. Concentrate on Basics(All Subjects)</p>
<h3 style="margin: 0;">Suggestions</h3> 	<h3 style="margin: 0;">Questions</h3> 
<p>1. Request teachers to insist on reading Text books.</p>	<p>1. How will the Annual Exams be conducted?</p> <p>2. When will the school reopen?</p>

Congrats

CLASS VI PTM Attendance (2020-21)

- PTM -



Dear Parents,

Thank you for your continuous support, encouragement and feedback in the successful conduct of virtual classes.

Class	VI A	VI B	VI C	VI D	VI E
PTM Turnout	100 %	100%	100%	100%	100%

Overall PTM Turnout - 100 %