

Class: II, Sec: \_\_\_\_\_

Sanghamitra School  
Annual Examination Revision sheet-4

Sub: Hindi


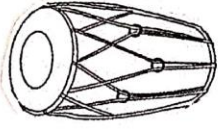

Date: 19-03-2020

Time: 15 min

Name: \_\_\_\_\_ R.No. \_\_\_\_\_  
Objective: To revise the taught concepts for Annual Examination.

I Write picture names (From T.B)

Ex:  कमल  
कमल



II Read the given sentence and underline the action words.

Ex: राम मैदान में खेल रहा है। (From CW)

1. बंदर पेड़ पर उछल रहा है।
2. नीता पढ़ रही है।
3. चंदा पलंग पर सो रही है।

Help box

कौआ  
नौका  
खिलौना  
दौलक  
बेल  
पेड़

Name: \_\_\_\_\_ Section: \_\_\_\_\_ Roll No: \_\_\_\_\_

Objectives:

Grammar

- Write the correct answer.
- Choose the right word.

**I. Choose same to same word for the underlined word from the given help box.**

clever      huge      helpful      simple      correct

1. The Ostrich is a big bird. \_\_\_\_\_
2. Eating vegetables is the right thing. \_\_\_\_\_
3. Teja is very intelligent. \_\_\_\_\_
4. Today's exam is very easy. \_\_\_\_\_
5. Mr Mohan is a kind person. \_\_\_\_\_

**II. Write the correct describing word and complete the sentence.**


1. I keep my class \_\_\_\_\_ and clean. (easy / neat)
2. Rat is a \_\_\_\_\_ animal. (small / huge)
3. I like those \_\_\_\_\_ apples. (blue / red)
4. The tree has \_\_\_\_\_ leaves. (green / black)
5. Lemons are \_\_\_\_\_. (sour / bitter)

**III. Read the given poem carefully.**

*Hickory, Dickory Dock,  
The mouse ran up the clock,  
The clock struck one,  
The mouse ran down.*

Now complete the sentences about the mouse.

- Hickory, Dickory, \_\_\_\_\_,  
The mouse \_\_\_\_\_ up the \_\_\_\_\_,  
The \_\_\_\_\_ struck \_\_\_\_\_,  
The \_\_\_\_\_ ran \_\_\_\_\_.



I. Tick (✓) the correct units.

ch's: Measurement and Geometry.

Name: \_\_\_\_\_

Sub: Math

class - II

Date: 19/3/2020


Time: 20 min

(a) Length of a pencil.  m / cm

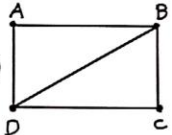
(b) Weight of T.V.  g / kg

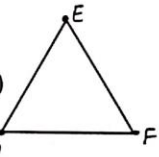
(c) bucket of water.  l / ml

(d) Weight of paper clip.  g / kg

(e) Spoon of medicine.  l / ml

II. Name the line segments and points for the given picture.

(a)  Line segments - \_\_\_\_\_  
Points - \_\_\_\_\_

(b)  Line segments - \_\_\_\_\_  
Points - \_\_\_\_\_

III. Tick (✓) the correct option:

(i) One-fourth of a fraction is written as

(a) 1.4 ( )      (b)  $\frac{1}{4}$  ( )      (c)  $\frac{4}{1}$  ( )

(ii) The correct way of writing 250 milli litre

(a) 250 l ( )      (b) 250 ml ( )      (c) 250 m ( )

(iii) Which of the following objects has 4 corners?

(a)  ( )      (b)  ( )      (c)  ( )

(iv) The correct division statement is \_\_\_\_\_

(a)  $8 \div 8 = 1$  ( )      (b)  $0 \div 8 = 1$  ( )      (c)  $8 \div 1 = 1$  ( )

Class: II

Sanghamitra School  
Annual Exam Revision sheet-4

Sub: E.V.S.  
Date: 19/3/2020  
Time: 20 min

Name: \_\_\_\_\_

I. Learn and write the spellings: [From CW book]

Function	Carnivores	Omnivores	Herbivores
Preservation	Digestion	Refrigeration	Swallow

II. Answer the following:

1. Name any two carnivores.

A. \_\_\_\_\_

2. Name any two protective foods.

A. \_\_\_\_\_

3. Name any two sense organs.

A. \_\_\_\_\_

I. Match the following: [From T.B]

- |                |     |                                  |
|----------------|-----|----------------------------------|
| (1) Cat        | ( ) | (a) top most part of the body.   |
| (2) Tongue     | ( ) | (b) should be washed thoroughly. |
| (3) Vegetables | ( ) | (c) feed on grains.              |
| (4) Head       | ( ) | (d) omnivores.                   |
| (5) Pigeons    | ( ) | (e) taste of food.               |